

This month it is January
Next month it will be...
Last month it was...

https://www.youtube.com/watch?v=drH3_Flt85g

How many days are in January?

In January there are...

Which month has the most days? January, February,
April ?

Name the British coins...

1p

2p

5p

10p



20p

50p

£1

£2

How much money is in each group?



In this group there is.....



In this group there is.....



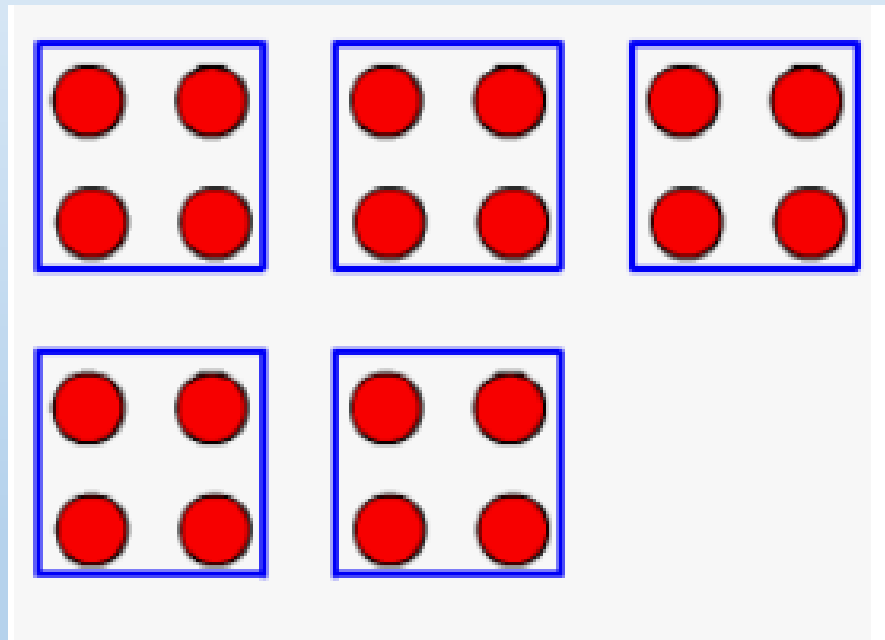
In this group there is.....

Flashback 4

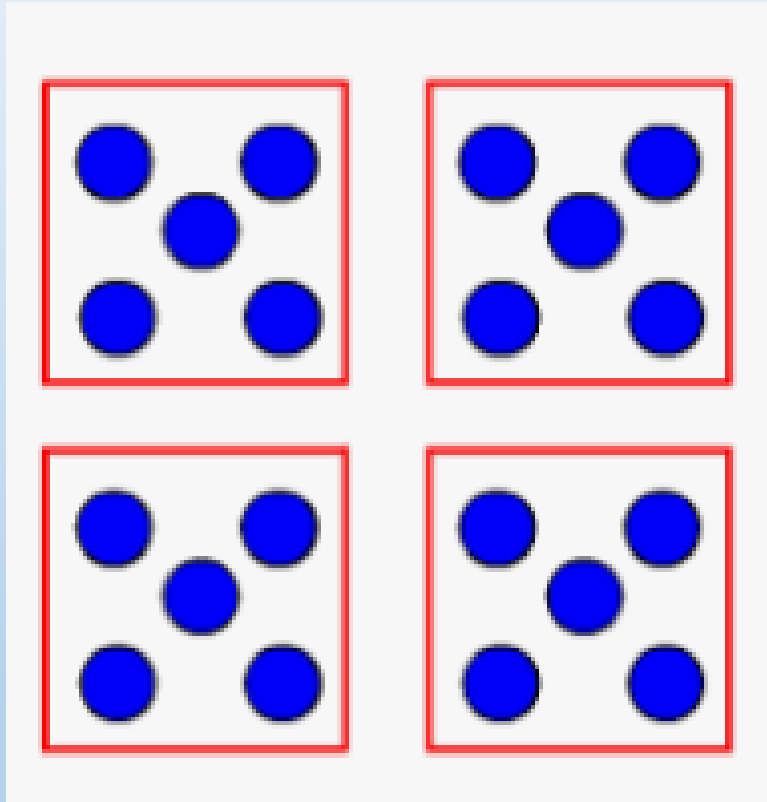
How much money is there altogether?

A group of five British coins arranged horizontally. From left to right: three 20p coins, one 5p coin, and one 2p coin.

What multiplication calculation is shown?



What multiplication calculation is shown?



Use $<$, $>$ or $=$ to compare.

$$8 \times 3 \quad \bigcirc \quad 4 \times 6$$

How could you show multiplication using groups here?



Flashback 4

What is 2×8 ?

There are 5 flowers in each vase.
How many flowers altogether?



One triangle has 3 sides.

How many sides do 5 triangles have?

There are 10 crayons in each pack.

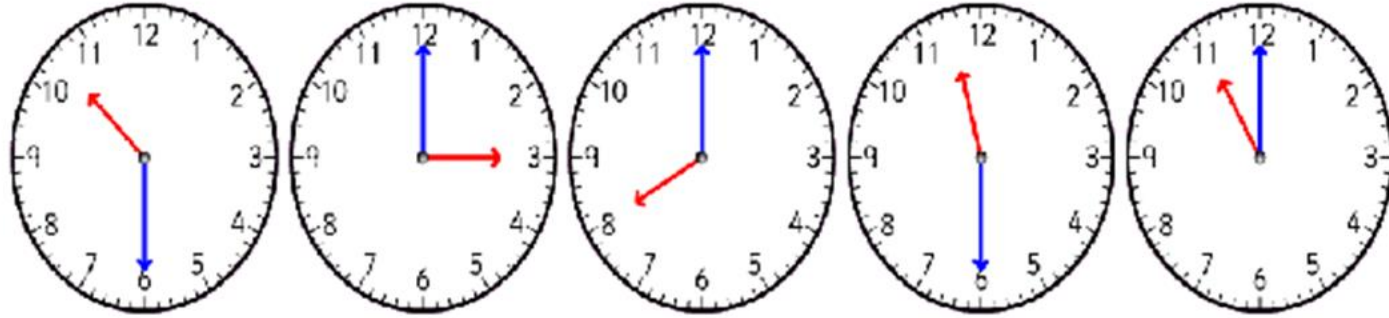
How many crayons altogether?



- <https://www.youtube.com/watch?v=IZ4ooLN7Bmo>
- Let's sing the 4 X tables song... how much can you remember?
- <https://www.topmarks.co.uk/maths-games/hit-the-button>
- How many will you score today????

What time is shown on the clock?

Draw a line to match the analogue clock to the digital clock showing the same time.



10:30

8:00

11:00

11:30

3:00

There are 15 bottles. Divide them into 3 equal groups.

What division equation can you say?

What other equations can you say?




Multiply 23 by 4

There are 12 lemons. Divide them into 3 equal groups.

What division equation can you say?

What other equations can you say?





$18 \div 3 = \square$

$18 \div 6 = \square$



$12 \div \square = 4$

$12 \div \square = 3$