

This month it is January  
Next month it will be...  
Last month it was...

[https://www.youtube.com/watch?v=drH3\\_Flt85g](https://www.youtube.com/watch?v=drH3_Flt85g)

How many days are in January?  
In January there are...

Which month has the most days? December, January  
and march?

# Name the British coins...

1p

2p

5p

10p



20p

50p

£1

£2

# How much money is in each group?



In this group there is.....



In this group there is.....



In this group there is.....

<https://www.youtube.com/watch?v=2anExgLI0sY>

- Watch some of this video to remind yourselves about what number bonds are.

Number bonds: Pairs of numbers that can be used to solve calculations easily.

$1+9$

$3+4$

$5+3$

$10+90$

$30+40$

$50+30$

$100+900$

$300+400$

$500+300$

Complete these number bonds...

$5+4$

$4+2$

$2+1$

- <https://www.topmarks.co.uk/maths-games/hit-the-button>
- Play the Hit the Button game and see if you can quickly solve the number bonds.


- <https://www.youtube.com/watch?v=IZ4ooLN7Bmo>
- Let's sing the 4 X tables song... how much can you remember?
- <https://www.topmarks.co.uk/maths-games/hit-the-button>
- How many will you score today????

# What time is shown on the clock?

- <https://www.topmarks.co.uk/time/teaching-clock>




What division calculation is each array showing?




$$18 \div 3 = \square$$

$$18 \div 6 = \square$$




$$12 \div \square = 4$$

$$12 \div \square = 3$$



$$\square \div 3 = 10$$

$$\square \div 10 = 3$$



$$\square \div \square = \square \quad \square \div \square = \square$$